

# 4<sup>th</sup> Grade: Measurement

Number of days in a year

--	--	--

How many feet are in 84 inches?

--



What time is shown on this clock?

	:	
--	---	--

2.5 centimeters =

--

inch

12 feet =

--

yards

When it is 11:40,  
the clock's minute hand  
points to this number

--

Number of cups in 7 quarts

18 feet =  yards

18 cups =  pints



minutes after 7 o'clock

My ruler is 1 foot long  
and approximately =

centimeters

A girl is 6 feet tall. Her  
brother is 1 inch shorter.  
How tall is the brother?


3 pints =  cups

4 pints =  quarts

Number of minutes in three hours

What time is shown on this clock?

:



The temperature on this thermometer reads

degrees

Number of months in a year

--	--

Number of feet in 12 yards

--	--



What time is shown on this clock?

	:	
--	---	--


The temperature on this thermometer reads

--	--

degrees

--

quarts = one gallon



Number of hours in 2 days

--	--

Number of cups in 2 gallons

--	--




--	--

minutes after 3 o'clock

The temperature on this thermometer reads

--	--

degrees



Three yards =  feet


quart = 2 pints

Number of inches in 8 feet

--	--

Number of months in 4 years

--	--



--	--

minutes after 7 o'clock



The temperature on this thermometer reads

--	--

degrees

Rashaad began reading his book at 12:10.

He finished reading at 1:20.

Altogether, he read for

--	--

minutes.

Answers: 4<sup>th</sup> Grade Measurement

#1	#2	#3	#4	#5	#6
365	28	6 2	12	48	96
7	6 9	180	36	32	48
920	45	754	908	50	15
4	30	39	75	67	23
1	71		4	9	70
8				1	